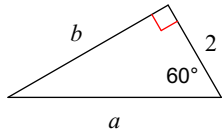


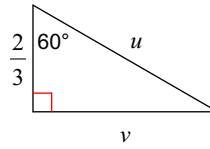
# Special Right Triangles

**Find the missing side lengths. Leave your answers as radicals in simplest form.**

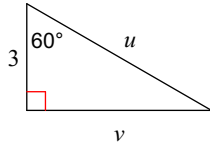
1)



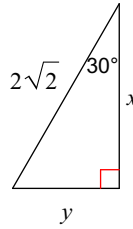
2)



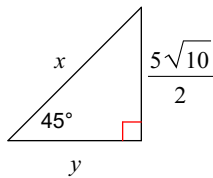
3)



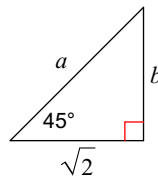
4)



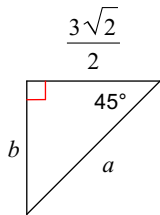
5)



6)



7)



8)

