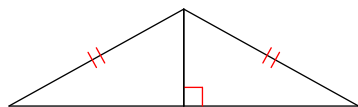


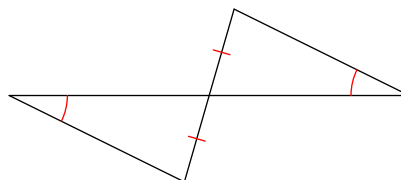
Triangle Congruence

State if the two triangles are congruent. If they are, state how you know.

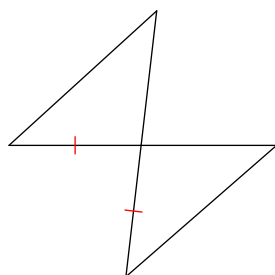
1)



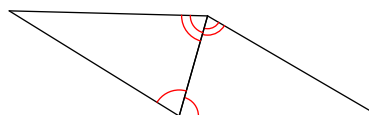
2)



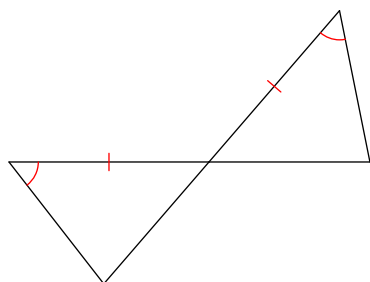
3)



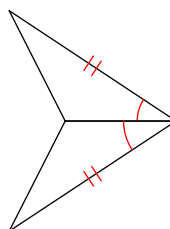
4)



5)



6)



Mark the angles and sides of each pair of triangles to indicate that they are congruent.

7) $\triangle YXW \cong \triangle YRQ$

8) $\triangle SRQ \cong \triangle SAC$

